

Name: \_\_\_\_\_

## Unpacking The Book: Final

### Section #1: Fill in the blanks

(Each blank is worth one point. This entire section is worth 30 points.)

1. From “Dan to Beersheba” was approximately \_\_\_\_\_ miles.
2. Ancient Israel was approximately \_\_\_\_\_ miles wide.
3. Joseph’s sons were \_\_\_\_\_ and \_\_\_\_\_.
4. The “Trans-Jordan” tribes were \_\_\_\_\_ and \_\_\_\_\_ and \_\_\_\_\_.
5. Abraham, Isaac, Jacob and Joseph are known as the \_\_\_\_\_ of Israel.
6. The first capital of the United Kingdom was \_\_\_\_\_.
7. The “second” and final capital of the Southern Kingdom (in Judah) was \_\_\_\_\_.
8. Jerusalem was originally called \_\_\_\_\_.
9. Rachel had two sons, they were \_\_\_\_\_ and \_\_\_\_\_.
10. The term “The Law” includes three elements: the \_\_\_\_\_, the \_\_\_\_\_ and the \_\_\_\_\_.
11. The \_\_\_\_\_ and \_\_\_\_\_ were mandatory sacrifices for the Israelites.
12. The three kings of the United Kingdom were \_\_\_\_\_, \_\_\_\_\_ and \_\_\_\_\_.
13. A regional ruler who led God’s people in times of crisis was a \_\_\_\_\_.
14. The cycle found in the book of Judges includes: rebellion, \_\_\_\_\_, \_\_\_\_\_, \_\_\_\_\_ and deliverance.
15. The temple built by \_\_\_\_\_ was an inexpensive replica of the temple built by Solomon.

16. Identify these neighboring empires:

\_\_\_\_\_ captured the ten tribes in the Northern Kingdom.

\_\_\_\_\_ destroyed Solomon's temple.

\_\_\_\_\_ provided for Jacob's extended family during a great famine.

\_\_\_\_\_ allowed the Jews to return home from exile.

### **Section #2 Label the following True or False**

(Each question is worth 1 point each, for a section total of 15 points.)

17. The sons of Jacob included Ephraim and Manasseh.

18. The Cities of Refuge protected a man accused of pre-meditated murder.

19. The City of David (original city) was located on the temple mount.

20. The city of Jerusalem sits upon several hills with major valleys on all four sides.

21. Jesus' childhood home was Bethlehem.

22. Jereboam was one of the Kings of the United Kingdom.

23. Solomon's temple was destroyed in 586 BC.

24. The Ark of the Covenant was present in the Holy of Holies in Zerubbabel's temple.

25. Herod finished his temple and the surrounding courts in just 3 years.

26. Haggai, Zechariah and Malachi were "Post Exilic" prophets

27. Isaiah and Joel preached to both kingdoms.

28. The Northern Kingdom is also known as Ephraim.

29. The Northern Kingdom had fewer "bad" kings than the Southern Kingdom.

30. Cyrus ruled a combined kingdom of Medes and Persians.

31. Jeshua was the High Priest and a religious leader who returned with the second wave of returning exiles.

### **Section Three: Short Answer**

(Each question is worth 2 points each for a section total of 10 points)

32. Describe the main focus of Ezra and Nehemiah as they returned to Jerusalem.
  
  
  
  
  
  
  
  
  
  
33. Who were the Pharisees?
  
  
  
  
  
  
  
  
  
  
34. Who were the Sadducees?
  
  
  
  
  
  
  
  
  
  
35. What was John's major reason for writing his gospel?
  
  
  
  
  
  
  
  
  
  
36. Briefly describe which major people group Peter and Paul were called to minister to?  
  
Peter:  
  
Paul:

### **Section #4: Fill in the blanks**

(Each answer in each list is worth one point for a section total of 7 points)

37. The prophets in the Northern Kingdom were:
  - a.
  - b.
  
  
  
  
  
  
  
  
  
  
38. Briefly describe the three years of Christ's public ministry.
  - a.
  - b.
  - c.

39. The first king in the Northern and Southern Kingdoms (after the United Kingdom was divided) were:

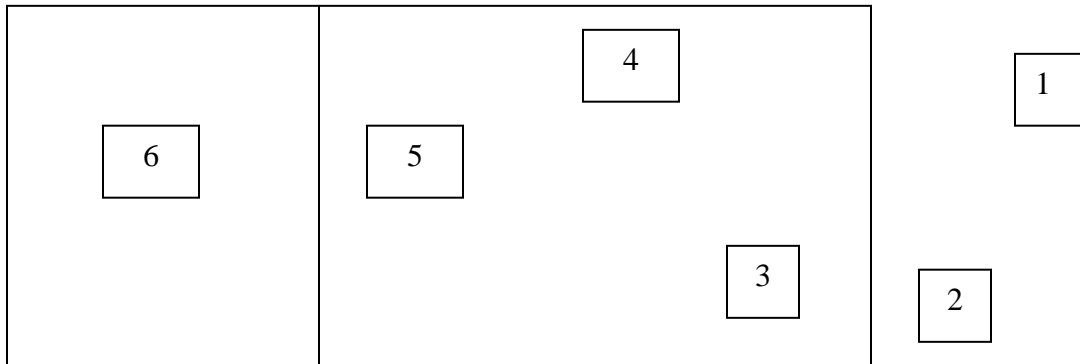
a. Northern:

b. Southern:

### Section #5 Diagrams

(Each label on each diagram is worth one point, for a section total of 6 points)

40. Label the 6 pieces of “furniture” in and around the Tabernacle.



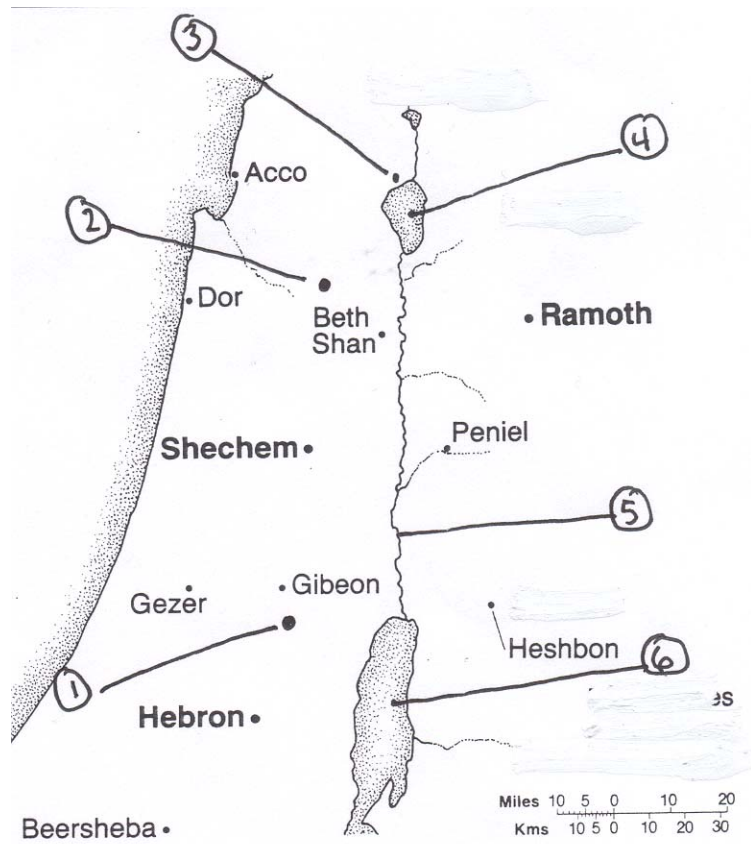
## Section #6 Maps

(Total section is worth 25 points)

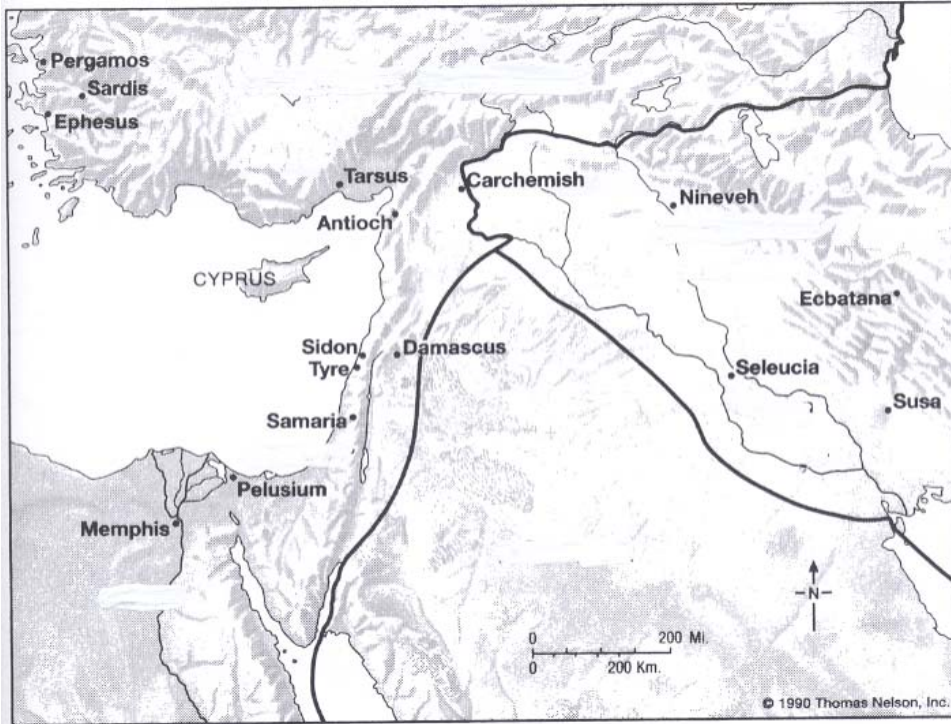
41. On this map, correctly identify the following (6):

Jerusalem  
Nazareth  
Capernaum

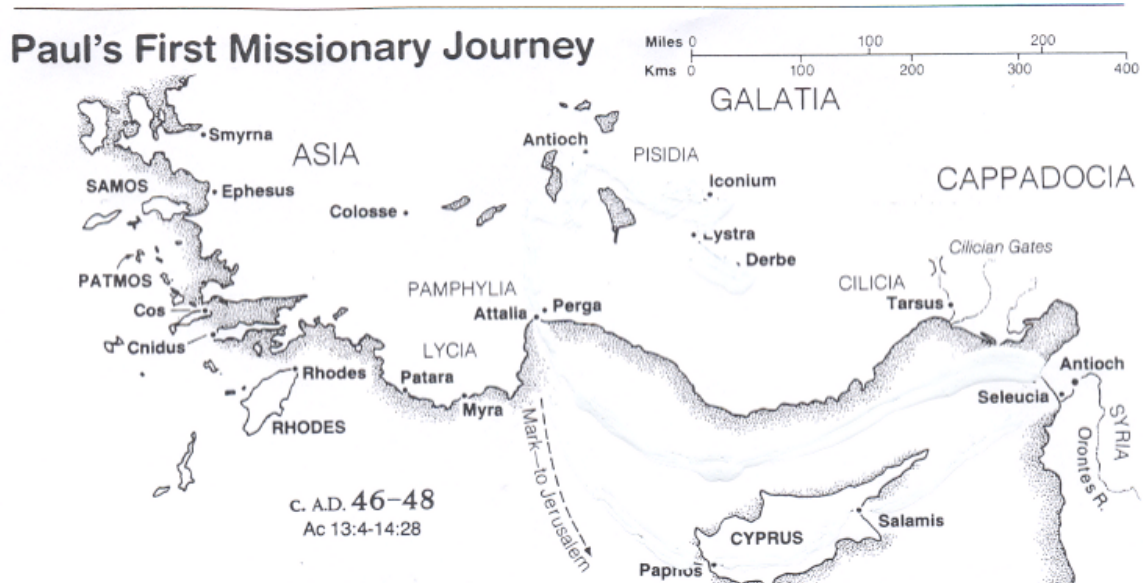
The Sea of Galilee  
The Dead Sea  
The Jordan River.



42. On this map, correctly identify the following empires (4):  
 Egypt, Assyria, Babylon, and Persia. Circle the general area.



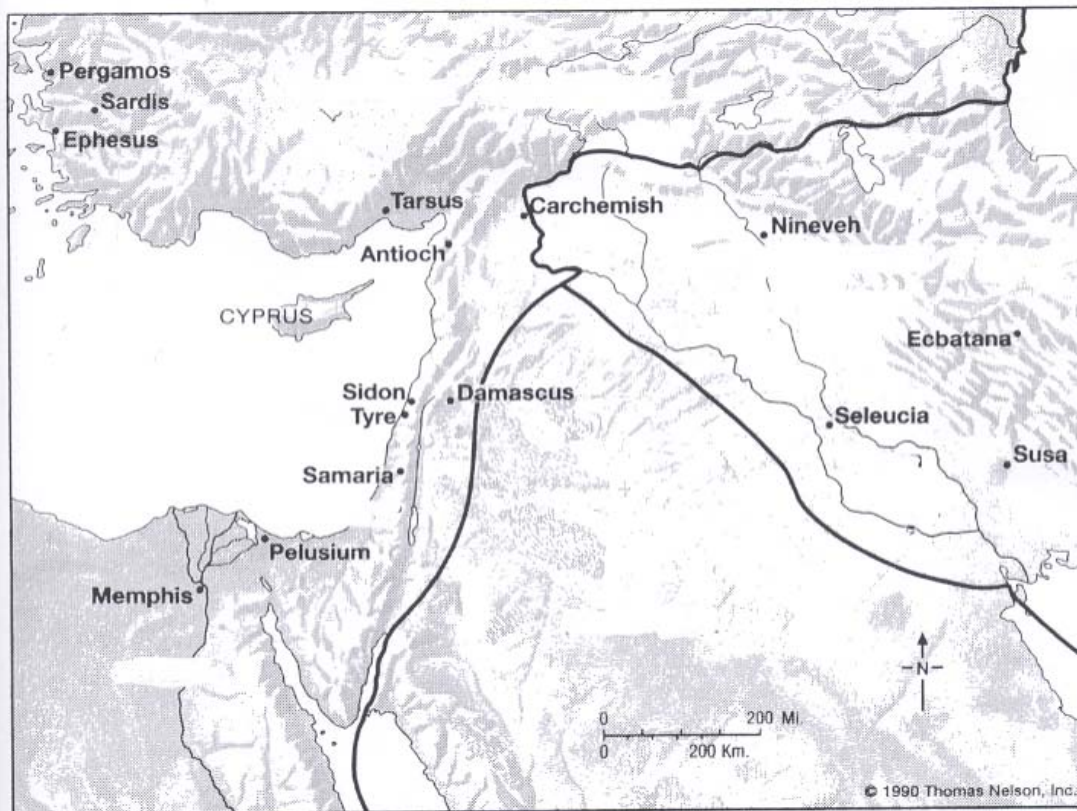
43. On this map, trace the first missionary journey of Paul (worth 4 points).



44. On this map, trace the exodus from Egypt to Kadesh Barnea (worth 4 points).



45. On this map, trace Abraham's trip from Ur to Israel. (worth 3 points)





46. Fill in the OT Flow Chart. Each correct answer is worth 1/2 point (20 total points).

